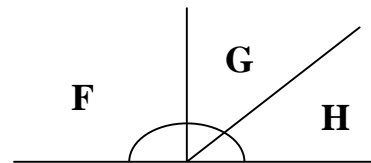
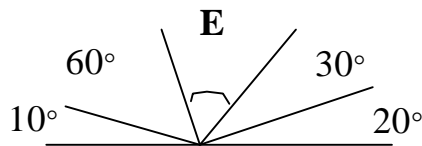
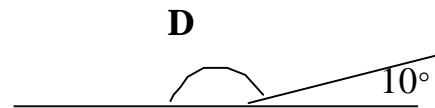
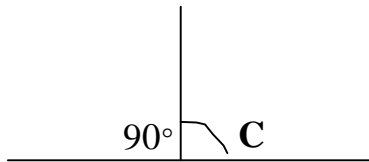
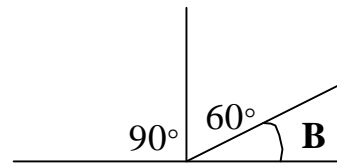
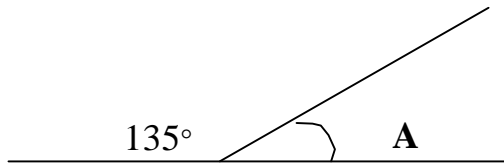


Angles and Lines

All angles on a line add up to 180° . Work out what these missing angles are (they are not drawn to scale so don't measure!)



Angles in a triangle also total 180° . What are the missing angles in these triangles?

Can you work out the angles in a square?

